

Question ID 7a5a74a6

2.1

Assessment	Test	Domain	Skill	Difficulty
SAT	Math	Algebra	Linear equations in one variable	<div> <div></div> <div></div> <div></div> </div>

ID: 7a5a74a6

$$3(2x-6)-11=4(x-3)+6$$

If x is the solution to the equation above, what is the value of $x-3$?

- A. $\frac{23}{2}$
- B. $\frac{17}{2}$
- C. $\frac{15}{2}$
- D. $-\frac{15}{2}$

ID: 7a5a74a6 Answer

Correct Answer: B

Rationale

Choice B is correct. Because 2 is a factor of both $2x$ and 6, the expression $2x-6$ can be rewritten as $2(x-3)$.

Substituting $2(x-3)$ for $(2x-6)$ on the left-hand side of the given equation yields

$3(2)(x-3)-11=4(x-3)+6$, or $6(x-3)-11=4(x-3)+6$. Subtracting $4(x-3)$ from both sides of this equation yields $2(x-3)-11=6$. Adding 11 to both sides of this equation yields $2(x-3)=17$. Dividing both

sides of this equation by 2 yields $x-3=\frac{17}{2}$.

Alternate approach: Distributing 3 to the quantity $(2x-6)$ on the left-hand side of the given equation and distributing 4 to the quantity $(x-3)$ on the right-hand side yields $6x-18-11=4x-12+6$, or

$6x-29=4x-6$. Subtracting $4x$ from both sides of this equation yields $2x-29=-6$. Adding 29 to both sides

of this equation yields $2x=23$. Dividing both sides of this equation by 2 yields $x=\frac{23}{2}$. Therefore, the value of

$x-3$ is $\frac{23}{2}-3$, or $\frac{17}{2}$.

Choice A is incorrect. This is the value of x , not $x - 3$. Choices C and D are incorrect. If the value of $x - 3$ is $\frac{15}{2}$ or $-\frac{15}{2}$, it follows that the value of x is $\frac{21}{2}$ or $-\frac{9}{2}$, respectively. However, solving the given equation for x yields $x = \frac{23}{2}$. Therefore, the value of $x - 3$ can't be $\frac{15}{2}$ or $-\frac{15}{2}$.

Question Difficulty: Medium

Question ID aa85b138

2.2

Assessment	Test	Domain	Skill	Difficulty
SAT	Math	Algebra	Linear equations in one variable	<div> <div></div> <div></div> <div></div> </div>

ID: aa85b138

$$2n + 6 = 14$$

A tree had a height of 6 feet when it was planted. The equation above can be used to find how many years n it took the tree to reach a height of 14 feet. Which of the following is the best interpretation of the number 2 in this context?

- A. The number of years it took the tree to double its height
- B. The average number of feet that the tree grew per year
- C. The height, in feet, of the tree when the tree was 1 year old
- D. The average number of years it takes similar trees to grow 14 feet

ID: aa85b138 Answer

Correct Answer: B


Rationale

Choice B is correct. The height of the tree at a given time is equal to its height when it was planted plus the number of feet that the tree grew. In the given equation, 14 represents the height of the tree at the given time, and 6 represents the height of the tree when it was planted. It follows that $2n$ represents the number of feet the tree grew from the time it was planted until the time it reached a height of 14 feet. Since n represents the number of years between the given time and the time the tree was planted, 2 must represent the average number of feet the tree grew each year.

Choice A is incorrect and may result from interpreting the coefficient 2 as doubling instead of as increasing by 2 each year. Choice C is incorrect. The height of the tree when it was 1 year old was $2(1) + 6 = 8$ feet, not 2 feet.

Choice D is incorrect. No information is given to connect the growth of one particular tree to the growth of similar trees.

Question Difficulty: Medium

Assessment	Test	Domain	Skill	Difficulty
SAT	Math	Algebra	Linear equations in one variable	

ID: 15daa8d6

$$2x + 16 = a(x + 8)$$

In the given equation, a is a constant. If the equation has infinitely many solutions, what is the value of a ?

ID: 15daa8d6 Answer

Correct Answer: 2

Rationale

The correct answer is **2**. An equation with one variable, x , has infinitely many solutions only when both sides of the equation are equal for any defined value of x . It's given that $2x + 16 = a(x + 8)$, where a is a constant. This equation can be rewritten as $2(x + 8) = a(x + 8)$. If this equation has infinitely many solutions, then both sides of this equation are equal for any defined value of x . Both sides of this equation are equal for any defined value of x when $2 = a$. Therefore, if the equation has infinitely many solutions, the value of a is **2**.

Alternate approach: If the given equation, $2x + 16 = a(x + 8)$, has infinitely many solutions, then both sides of this equation are equal for any value of x . If $x = 0$, then substituting 0 for x in $2x + 16 = a(x + 8)$ yields $2(0) + 16 = a(0 + 8)$, or $16 = 8a$. Dividing both sides of this equation by 8 yields $2 = a$.

Question Difficulty: Medium

Assessment	Test	Domain	Skill	Difficulty
SAT	Math	Algebra	Linear equations in one variable	■ ■ □

ID: 12ee1edc

$$(b-2)x = 8$$

In the given equation, b is a constant. If the equation has no solution, what is the value of b ?

- A. 2
- B. 4
- C. 6
- D. 10

ID: 12ee1edc Answer

Correct Answer: A


Rationale

Choice A is correct. This equation has no solution when there is no value of x that produces a true statement.

Solving the given equation for x by dividing both sides by $(b-2)$ gives $x = \frac{8}{(b-2)}$. When $(b-2) = 0$, the right-hand side of this equation will be undefined, and the equation will have no solution. Therefore, when $b = 2$, there is no value of x that satisfies the given equation.

Choices B, C, and D are incorrect. Substituting 4, 6, and 10 for b in the given equation yields exactly one solution, rather than no solution, for x . For example, substituting 4 for b in the given equation yields $(4-2)x = 8$, or $2x = 8$. Dividing both sides of $2x = 8$ by 2 yields $x = 4$. Similarly, if $b = 6$ or $b = 10$, $x = 2$ and $x = 1$, respectively.

Question Difficulty: Medium

Assessment	Test	Domain	Skill	Difficulty
SAT	Math	Algebra	Linear equations in one variable	

ID: 70e29454

$$a(3-x) - b = -1 - 2x$$

In the equation above, a and b are constants. If the equation has infinitely many solutions, what are the values of a and b ?

- A. $a = 2$ and $b = 1$
- B. $a = 2$ and $b = 7$
- C. $a = -2$ and $b = 5$
- D. $a = -2$ and $b = -5$

ID: 70e29454 Answer

Correct Answer: B

Rationale

Choice B is correct. Distributing the a on the left-hand side of the equation gives $3a - b - ax = -1 - 2x$. Rearranging the terms in each side of the equation yields $-ax + 3a - b = -2x - 1$. Since the equation has infinitely many solutions, it follows that the coefficients of x and the free terms on both sides must be equal. That is, $-a = -2$, or $a = 2$, and $3a - b = -1$. Substituting 2 for a in the equation $3a - b = -1$ gives $3(2) - b = -1$, so $b = 7$.

Choice A is incorrect and may be the result of a conceptual error when finding the value of b . Choices C and D are incorrect and may result from making a sign error when simplifying.

Question Difficulty: Medium

Assessment	Test	Domain	Skill	Difficulty
SAT	Math	Algebra	Linear equations in one variable	<div><div></div><div></div><div></div></div>

ID: f09097b1

An agricultural scientist studying the growth of corn plants recorded the height of a corn plant at the beginning of a study and the height of the plant each day for the next 12 days. The scientist found that the height of the plant increased by an average of 1.20 centimeters per day for the 12 days. If the height of the plant on the last day of the study was 36.8 centimeters, what was the height, in centimeters, of the corn plant at the beginning of the study?

ID: f09097b1 Answer

Rationale

The correct answer is 22.4. If the height of the plant increased by an average of 1.20 centimeters per day for 12 days, then its total growth over the 12 days was $(1.20)(12) = 14.4$ centimeters. The plant was 36.8 centimeters tall after 12 days, so at the beginning of the study its height was $36.8 - 14.4 = 22.4$ centimeters. Note that 22.4 and $112/5$ are examples of ways to enter a correct answer.

Alternate approach: The equation $36.8 = 12(1.20) + h$ can be used to represent this situation, where h is the height of the plant, in centimeters, at the beginning of the study. Solving this equation for h yields 22.4 centimeters.

Question Difficulty: Medium

Assessment	Test	Domain	Skill	Difficulty
SAT	Math	Algebra	Linear equations in one variable	<div><div></div><div></div><div></div></div>

ID: 4f669597

$$2(p+1)+8(p-1)=5p$$


What value of p is the solution of the equation above?

ID: 4f669597 Answer

Rationale

The correct answer is 1.2. One way to solve the equation $2(p+1)+8(p-1)=5p$ is to first distribute the terms outside the parentheses to the terms inside the parentheses: $2p+2+8p-8=5p$. Next, combine like terms on the left side of the equal sign: $10p-6=5p$. Subtracting $10p$ from both sides yields $-6=-5p$. Finally, dividing both sides by -5 gives $p=\frac{6}{5}$, which is equivalent to $p=1.2$. Note that 1.2 and $\frac{6}{5}$ are examples of ways to enter a correct answer.

Question Difficulty: Medium

Assessment	Test	Domain	Skill	Difficulty
SAT	Math	Algebra	Linear equations in one variable	

ID: ce314070

If $4x - \frac{1}{2} = -5$, what is the value of $8x - 1$?

- A. 2
- B. $-\frac{9}{8}$
- C. $-\frac{5}{2}$
- D. -10

ID: ce314070 Answer

Correct Answer: D

Rationale

Choice D is correct. Multiplying the given equation by 2 on each side yields $2\left(4x - \frac{1}{2}\right) = 2(-5)$. Applying the distributive property, this equation can be rewritten as $2(4x) - 2\left(\frac{1}{2}\right) = 2(-5)$, or $8x - 1 = -10$.

Choices A, B, and C are incorrect and may result from calculation errors in solving the given equation for x and then substituting that value of x in the expression $8x - 1$.

Question Difficulty: Medium

Assessment	Test	Domain	Skill	Difficulty
SAT	Math	Algebra	Linear equations in one variable	<div><div></div><div></div><div></div></div>

ID: 36ab4122

Megan’s regular wage at her job is p dollars per hour for the first 8 hours of work in a day plus 1.5 times her regular hourly wage for work in excess of 8 hours that day. On a given day, Megan worked for 10 hours, and her total earnings for that day were \$137.50. What is Megan’s regular hourly wage?

- A. \$11.75
- B. \$12.50
- C. \$13.25
- D. \$13.75

ID: 36ab4122 Answer

Rationale

Choice B is correct. Since p represents Megan’s regular pay per hour, $1.5p$ represents the pay per hour in excess of 8 hours. Since Megan worked for 10 hours, she must have been paid p dollars per hour for 8 of the hours plus $1.5p$ dollars per hour for the remaining 2 hours. Therefore, since Megan earned \$137.50 for the 10 hours, the situation can be represented by the equation $137.5 = 8p + 2(1.5)p$. Distributing the 2 in the equation gives $137.5 = 8p + 3p$, and combining like terms gives $137.5 = 11p$. Dividing both sides by 11 gives $p = 12.5$. Therefore, Megan’s regular wage is \$12.50.

Choices A and C are incorrect and may be the result of calculation errors. Choice D is incorrect and may result from finding the average hourly wage that Megan earned for the 10 hours of work.

Question Difficulty: Medium

Assessment	Test	Domain	Skill	Difficulty
SAT	Math	Algebra	Linear equations in one variable	<div><div></div><div></div><div></div></div>

ID: 5ad9eff0

The width of a rectangular dance floor is w feet. The length of the floor is 6 feet longer than its width. Which of the following expresses the perimeter, in feet, of the dance floor in terms of w ?

- A. $2w + 6$
- B. $4w + 12$
- C. $w^2 + 6$
- D. $w^2 + 6w$

ID: 5ad9eff0 Answer

Correct Answer: B

Rationale

Choice B is correct. It is given that the width of the dance floor is w feet. The length is 6 feet longer than the width; therefore, the length of the dance floor is $w + 6$. So the perimeter is $w + w + (w + 6) + (w + 6) = 4w + 12$.

Choice A is incorrect because it is the sum of one length and one width, which is only half the perimeter. Choice C is incorrect and may result from using the formula for the area instead of the formula for the perimeter and making a calculation error. Choice D is incorrect because this is the area, not the perimeter, of the dance floor.

Question Difficulty: Medium

Assessment	Test	Domain	Skill	Difficulty
SAT	Math	Algebra	Linear equations in one variable	<div><div></div><div></div><div></div></div>

ID: 45bba652

If $2(x-5) + 3(x-5) = 10$, what is the value of $x-5$?

- A. 2
- B. 5
- C. 7
- D. 12

ID: 45bba652 Answer

Correct Answer: A

Rationale

Choice A is correct. Adding the like terms on the left-hand side of the given equation yields $5(x-5) = 10$.

Dividing both sides of this equation by 5 yields $x-5 = 2$.

Choice B is incorrect and may result from subtracting 5, not dividing by 5, on both sides of the equation $5(x-5) = 10$. Choice C is incorrect. This is the value of x , not the value of $x-5$. Choice D is incorrect. This is the value of $x+5$, not the value of $x-5$.

Question Difficulty: Medium

Assessment	Test	Domain	Skill	Difficulty
SAT	Math	Algebra	Linear equations in one variable	<div><div></div><div></div><div></div></div>

ID: eafdbbbd

$$\frac{1}{4}(x + 5) - \frac{1}{3}(x + 5) = -7$$

What value of x is the solution to the given equation?

- A. -12
- B. -5
- C. 79
- D. 204

ID: eafdbbbd Answer

Correct Answer: C

Rationale

Choice C is correct. For the given equation, $(x + 5)$ is a factor of both terms on the left-hand side. Therefore, the given equation can be rewritten as $(\frac{1}{4} - \frac{1}{3})(x + 5) = -7$, or $(\frac{3}{12} - \frac{4}{12})(x + 5) = -7$, which is equivalent to $-\frac{1}{12}(x + 5) = -7$. Multiplying both sides of this equation by -12 yields $x + 5 = 84$. Subtracting 5 from both sides of this equation yields $x = 79$.

Choice A is incorrect. This is the value of x for which the left-hand side of the given equation equals $\frac{7}{12}$, not -7 .

Choice B is incorrect. This is the value of x for which the left-hand side of the given equation equals 0 , not -7 .

Choice D is incorrect. This is the value of x for which the left-hand side of the given equation equals $-\frac{209}{12}$, not -7 .

Question Difficulty: Medium